










## Shape puzzle

Each shape stands for a number.

The numbers shown are the totals of the line of three numbers in the row or column.

Find out which number each symbol represents and find the other totals.

			<div>12</div>
			<div>14</div>
			<div></div>
<div>20</div>	<div>6</div>	<div></div>	

$$\text{heart} =$$

$$\text{triangle} =$$

$$\text{pentagon} =$$